


CREATING BASS LINES

ASSIGNMENT #4


NAME _____

CREATE BASS LINES FOR EACH OF THE FOLLOWING PROGRESSIONS

1 C_MA⁷ A_MI⁷ D_MI⁷ G⁷ D^b_MA⁷ B^b_MI⁷ E^b7 A^b7



2 D⁷ / G⁷ / E⁷ / A⁷ / F[#]7 / B⁷ / C_MI⁷ / F⁷ /




3 F⁷ / / / B^b7 / / / G_MI⁷ / / / C⁷ / / /




4 A⁷(^b9) / / / / / / / D⁷(^b9) / / / / / / /



5 G⁷ / / / / / / / / / / / / / / / / /



6 E_MI⁷(^b5) / / / A⁷(^b9)(^b13) / / / D_MI⁷(^b5) / / / G⁷(^b9)(^b13) / / /



7 A_MA⁷ / / / A_MI⁷ / D⁷ / G_MA⁷ / / / A^b_MI⁷ / D^b7 /



8 D_MI⁷ D^b_MI⁷ C_MI⁷ F⁷ B^b_MA⁷ / B^b_MI⁷ E^b7 A_MI⁷ / A^b7([#]11) / G_MI⁷ / C⁹ /

